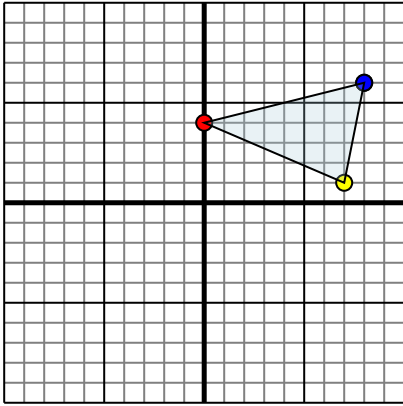




Reflect each shape as described.

1)

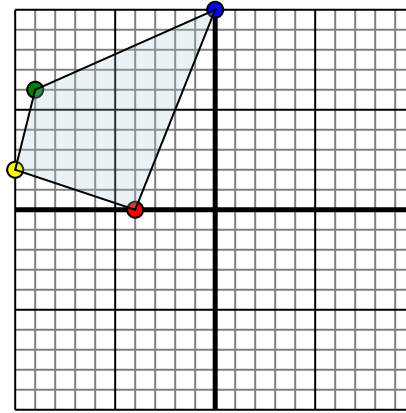


The shape above has the following coordinates:

- A. (0,4)
- B. (7,1)
- C. (8,6)

Reflect the shape over the X axis.

2)

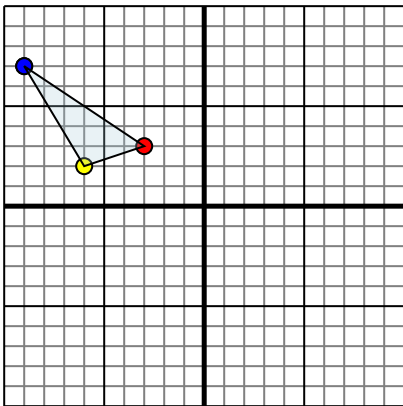


The shape above has the following coordinates:

- A. (-4,0)
- B. (-10,2)
- C. (-9,6)
- D. (0,10)

Reflect the shape over the Y axis.

3)

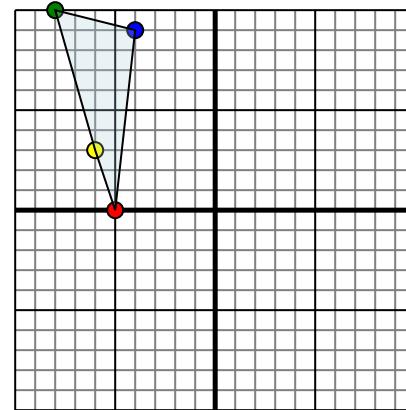


The shape above has the following coordinates:

- A. (-3,3)
- B. (-6,2)
- C. (-9,7)

Reflect the shape over the Y axis.

4)



The shape above has the following coordinates:

- A. (-5,0)
- B. (-6,3)
- C. (-8,10)
- D. (-4,9)

Reflect the shape over the X axis.

Answers

1a. \_\_\_\_\_

1b. \_\_\_\_\_

1c. \_\_\_\_\_

1d. \_\_\_\_\_

2a. \_\_\_\_\_

2b. \_\_\_\_\_

2c. \_\_\_\_\_

2d. \_\_\_\_\_

2e. \_\_\_\_\_

3a. \_\_\_\_\_

3b. \_\_\_\_\_

3c. \_\_\_\_\_

3d. \_\_\_\_\_

4a. \_\_\_\_\_

4b. \_\_\_\_\_

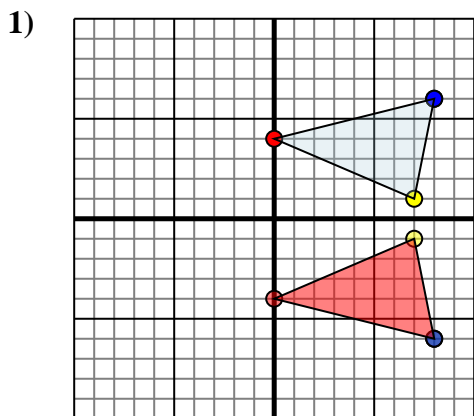
4c. \_\_\_\_\_

4d. \_\_\_\_\_

4e. \_\_\_\_\_



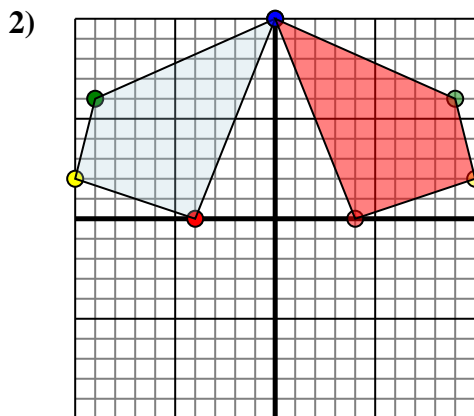
Reflect each shape as described.



The shape above has the following coordinates:

- A. (0,4)
- B. (7,1)
- C. (8,6)

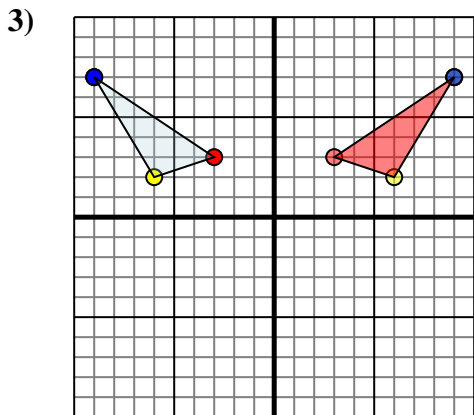
Reflect the shape over the X axis.



The shape above has the following coordinates:

- A. (-4,0)
- B. (-10,2)
- C. (-9,6)
- D. (0,10)

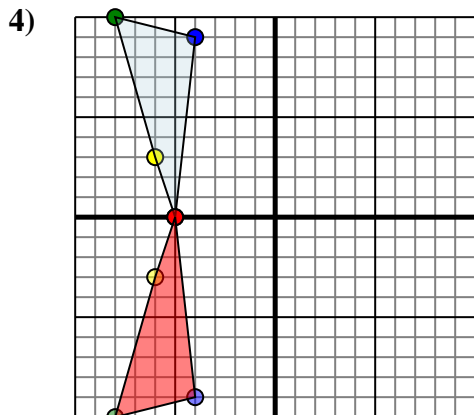
Reflect the shape over the Y axis.



The shape above has the following coordinates:

- A. (-3,3)
- B. (-6,2)
- C. (-9,7)

Reflect the shape over the Y axis.



The shape above has the following coordinates:

- A. (-5,0)
- B. (-6,3)
- C. (-8,10)
- D. (-4,9)

Reflect the shape over the X axis.

Answers

1a. 0,-4

1b. 7,-1

1c. 8,-6

1d. Graph

2a. 4,0

2b. 10,2

2c. 9,6

2d. 0,10

2e. Graph

3a. 3,3

3b. 6,2

3c. 9,7

3d. Graph

4a. -5,0

4b. -6,-3

4c. -8,-10

4d. -4,-9

4e. Graph